

Name: _____

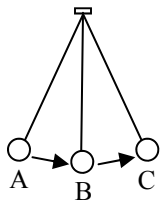
Period: _____

Harmonic Motion and Light Review

Key

Ch 11-15 Rev

Harmonic (H), Linear (L), or Wave (W) motion?			1. Frequency – A	A. The number of cycles per second. B. The size or strength of a cycle. C. Time it takes to complete one cycle. D. A part of motion that repeats over and over with a set series of events. E. A unit of one cycle per second.
Person running: L ____	A swing: H ____	Music: W ____	2. Period – C	
The moon: H ____	A car moving: L ____	Bird flying: L ____	3. Cycle – D	
Clock pendulum: H ____	Jumping Jacks: L ____	Bouncing spring: H ____	4. Hertz – E	
Ocean waves: W ____	X-rays: W ____	Radio Signals: W ____	5. Amplitude – B	



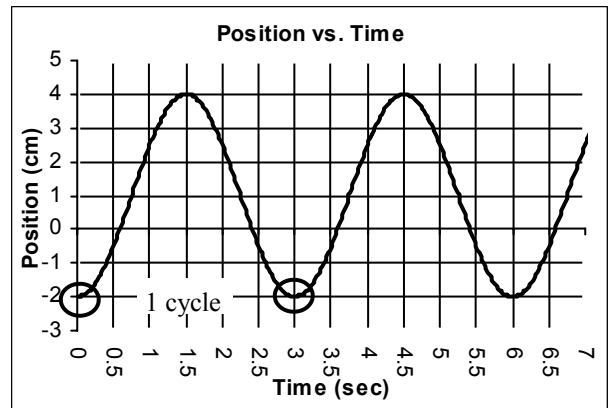
One cycle would be from C to C.

One half cycle would be from A to C.

The amplitude would be from C to B.

To shorten the period you would have to shorten or lengthen the string? *shorten*

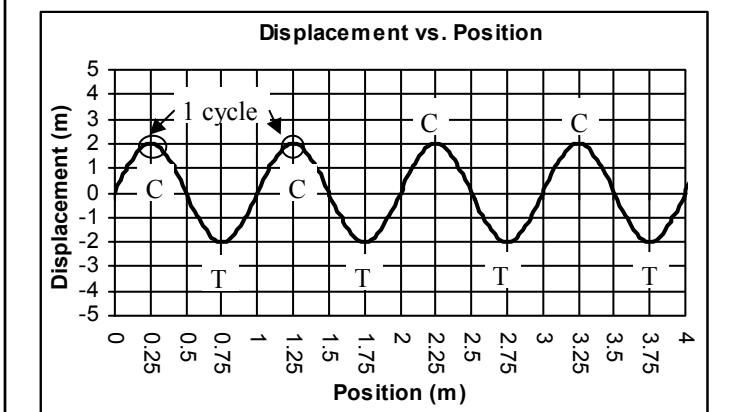
If the mass at the end was greater period would be? *same*
 If the amplitude was greater the period would be? *same*



If the frequency of a pendulum is 2 Hz, what is the period?
 $T = 1/f = 1/2 = 0.5 \text{ sec}$

If the period of a wave is 4 seconds, what is its frequency?
 $f = 1/T = 1/4 = 0.25 \text{ Hz}$

Mark 1 cycle of the harmonic motion.
 Starting at 1.5 secs, when does the 1st cycle end: 4.5 sec
 Number of complete cycles: 2.5 (little less) Period: 3 sec
 Frequency: 1/3 = 0.33 Hz Amplitude: 1/2(4 - (-2)) = 3/cm



Mark 1 cycle of the wave. / Is it a standing or moving wave?
 Mark the crests and troughs.
 Starting at 0.75 m, where does the 2nd cycle end:
 Number of complete cycles: 4 Wavelength: 1 m
 Amplitude: 2 m If $f = 4 \text{ Hz}$, find speed: $= f\lambda = 4 \times 1 = 4 \text{ m/s}$

Find its period: $T = 1/f = 1/200 = 0.005 \text{ sec}$

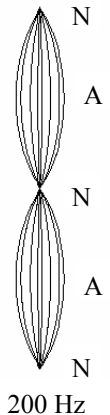
What harmonic is this? 2nd

Mark the nodes and anti-nodes.
 How many wavelengths is it? One

Can we hear this frequency? yes

Find the fundamental frequency:
200/2 = 100 Hz

3rd harmonic frequency:
100 x 3 = 300 Hz



If a wave is 30 m long and 4 Hz, find its speed.
 $v = f\lambda = 4 \times 30 = 120 \text{ m/s}$

If a 150 m/s wave has a frequency of 15 Hz, find its wavelength.
 $v = f\lambda$
 $150 = 15(\lambda)$
 $10 \text{ m} = \lambda$

Absorption, Reflection, Refraction, or Diffraction?

Light waves hit a mirror and bounces off by: Reflection

You can hear around a corner by: Diffraction

If a wave hits a soft boundary, it dies by: Absorptions

A wave bends inside a clear boundary by: Refraction

A pillow reduces sound by: Absorption

Light between your fingers causes darkness by: Diffraction

A prism makes a rainbow by: Refraction

1. Transverse – C	A. Faster than 340 m/s.	1. Radio waves—D	A. EM waves that can pass through skin and have short wavelengths.
2. Longitudinal—D	B. How we hear changes of frequency in sound.	2. Ultraviolet - E	B. Electromagnetic waves we feel as heat.
3. Pitch – B	C. Light is this kind of wave, moving 90° to the linear motion.	3. X-rays—A	C. Dangerous EM waves that have very high energy and come from nuclear reactions.
4. Loudness – E	D. Sound is this kind of wave, with the vibrations in the same direction as the motion.	4. Gamma rays—C	D. EM waves that have very low energy and long wavelengths.
5. Supersonic – A	E. How we hear amplitude in sound.	5. Infrared—B	E. EM waves with more energy than visible light and can cause sunburns.
		6. Microwaves—F	F. Long wavelengths; used in cell phones.

To be twice as loud a sound has to change by: + 20 dB

To be half as loud a 50 dB sound would have to become:
 $50 - 20 \text{ dB} = 30 \text{ dB}$

Humans can hear frequencies between: 20 Hz and 20,000 Hz

A sound wave has a frequency of 4 Hz. Find its wavelength.
 $v = 340 \text{ m/s (sound)}$ $340 = 4(\lambda)$
 $v = f\lambda$ $\lambda = 340/4 = 85 \text{ m}$

You hear the crack of a bullwhip 3 seconds after you see it move.
 How far away is it? $S = 340$ (you hear it); $T = 3 \text{ sec}$
 $S = D/T$ $D = 340 \times 3 =$
 $D = ST$ $D = 1020 \text{ m}$

You yell into a cave and 4 seconds later you hear the echo return.
 How deep is the cave? $S = 340$ (you yell); $T = 2 \text{ sec (echo)}$
 $D = ST = 340 \times 2 = 680 \text{ m}$

Additive or Subtractive Colors and Why

Using paints: Additive _ Why? Pigments and white background

Computer screen: subtr _ Why? Uses lights; backgnd is black

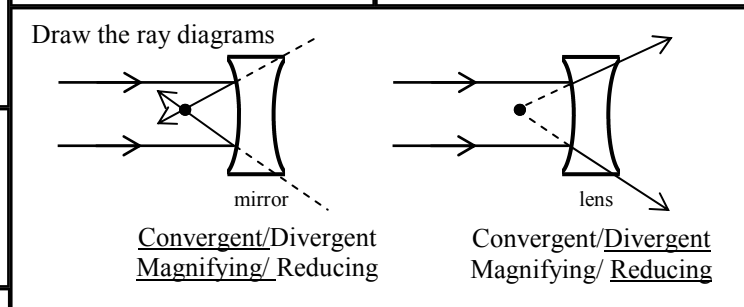
White light can be separated by a prism into these colors:
 ROY G BIV:
 Red Green Blue
 Orange Indigo
 Yellow Violet

What kind of light bulb is less efficient and why?
Incandescent—makes a lot of heat, too, not just light

Use RGB to make these colors.	Use CMYK to make these colors.
Black <u>none</u> Yellow <u>RG</u> Cyan <u>C</u> Magenta <u>RB</u> Blue <u>MC</u> Green <u>CY</u>	Black <u>K</u> Cyan <u>C</u> Magenta <u>M</u> Yellow <u>Y</u> Blue <u>B</u> White <u>none</u> Red <u>MY</u>

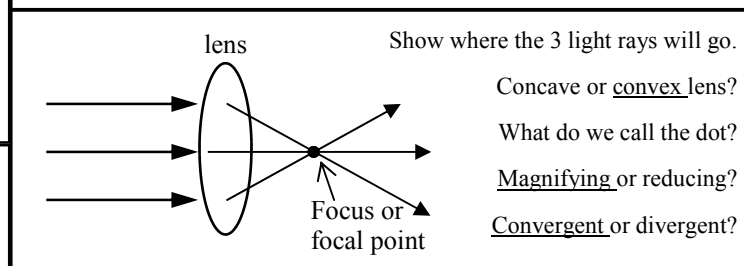
Where does light come from?
Electrons falling from high to low energy levels.

Two polarizers cancel out light if they are:
Turned 90° to each other (one vertical/ one horizontal)



Why do we see lightning and hear the thunder a few seconds later?
Light is much faster than sound

What is the speed of light? $3 \times 10^8 \text{ m/sec (REALLY fast)}$



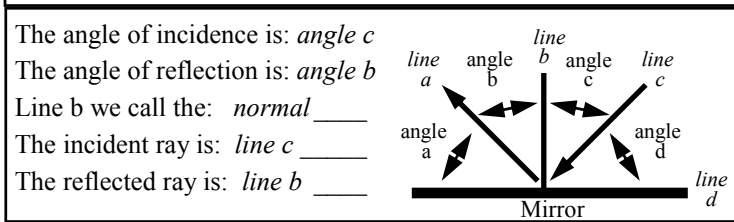
What has more energy: Visible light or X-rays?

What has a shorter wavelength: Microwaves or Ultraviolet rays?

What has a higher frequency: Radio waves or Infrared?

All light, visible or invisible is part of the: EM Spectrum

Visible light is a big/small part of this spectrum? *Very small*



If the angle of incidence is 50°, what is the angle of reflection?
 50° *The angle of incidence = angle of reflection*

An image looks to be 12 m away from a mirror. How far is the object?
 6 m *(images look twice as far away as the object)*

An object is 3 ft away from a mirror; the image looks: *6 ft*