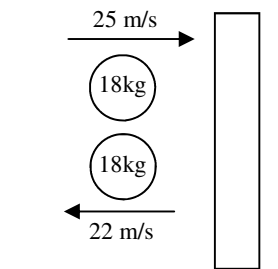
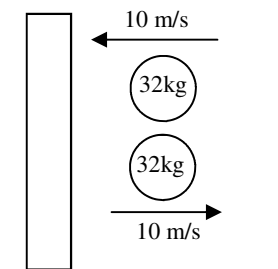


2011 PreAP Momentum 8

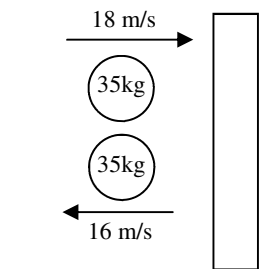
1. For each of the masses below decide if the Δp is + or - and calculate Δp .



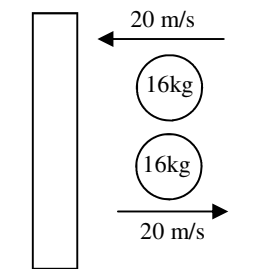
A. Δp : + or -?
* $\Delta p =$ _____



B. Δp : + or -?
* $\Delta p =$ _____

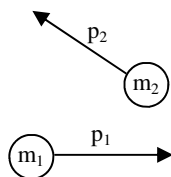


C. Δp : + or -?
 $\Delta p =$ _____



D. Δp : + or -?
 $\Delta p =$ _____

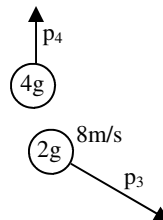
Remember when drawing vectors, longer arrows = greater magnitude.



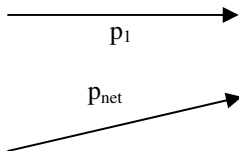
2. A. If $p_1 = p_2$ and m_2 is moving faster, which is more massive: m_1 or m_2 ?

B. * Draw the p_{net} of the system.

3. A. If $p_3 = 2p_4$, what is the velocity of the 4g mass?



B. Draw p_{net} .



4. The momentum of m_1 and p_{net} are given.

A. *Draw the momentum of m_2 .

B. If $m_1 = m_2$, which mass is moving faster?

5. Three hockey pucks are on frictionless ice. Two hockey pucks slam into and attach to the third puck.

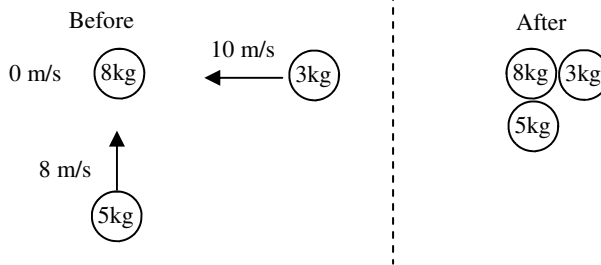
A. Since they stick together, $m_{final} =$

B. * Calculate the initial net momentum.

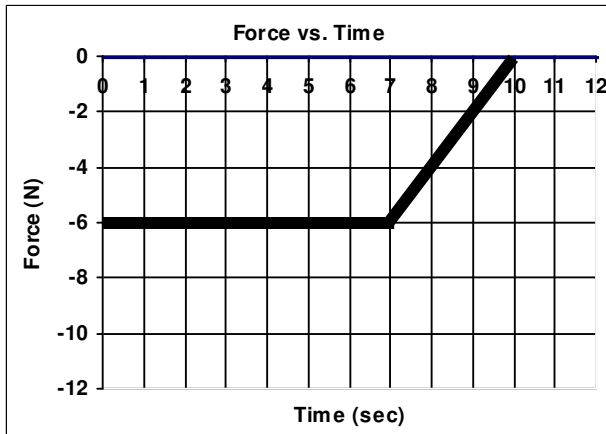
C. What must be the final net momentum?

D. Calculate the final velocity of the combined object.

(Velocity is a vector, so magnitude and direction.)



6. A 12 kg object is moving 20 m/s in the positive direction when it encounters the forces shown on the graph below.



- A. When is the object feeling a positive acceleration?
- B. When is the object feeling no acceleration?
- C. When is the object experiencing a negative acceleration?
- D. * Calculate the impulse on the object.
- E. Calculate the change of momentum of the object.
- F. Calculate its final momentum.
- G. Calculate its final velocity.

Q1A: change is negative, since it started + and ended -. $\Delta p = -846 \text{ kgm/s}$ Q1B: + change; $\Delta p = 640 \text{ kgm/s}$
 Q2B: Crazy and Lazy, where p1 and p2 are crazy.
 Q4A: p_{net} is Lazy. You have one of crazy's paths. Find the other one that makes Lazy's path.
 Q5A: Find p1 and p2, then do pyth and inverse tan to find p_{net} . Be sure to do a quadrant check for the angle.
 Q6D: Find the area of the graph.