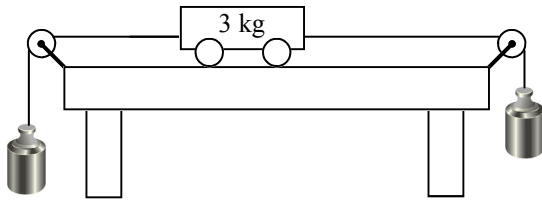
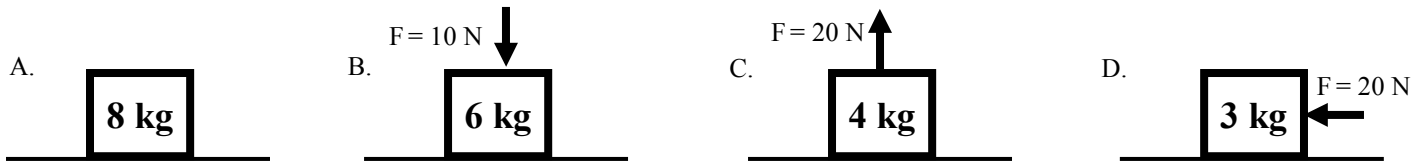


2009 Forces 2



1.
 - A. How many normal forces are acting on the cart?
 - B. Draw the normal forces on the cart.
 - C. How many normal forces are acting on the hanging masses?
 - D. What force is acting on all the cart and on the masses?
 - E. Calculate the force of weight of the cart.
 - F. If the cart is moving, is it accelerating or at constant speed?
 - G. Why?

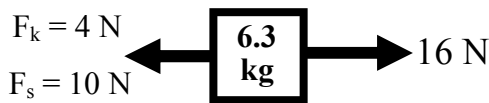
2. Calculate the normal forces acting on the objects below.



3. If $F_N = 25 \text{ N}$ and $\mu_s = 0.24$ and $\mu_k = 0.10$, calculate static and kinetic friction.

4. Static or Kinetic Friction?

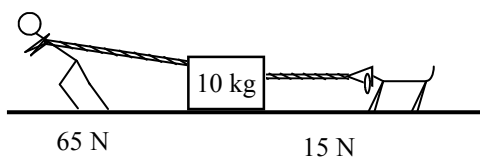
- A. Usually the smaller one.
- B. If this is greater than the applied force, the object will slow down and eventually stop.
- C. Between your shoes and the ground when you are walking normally.
- D. Use to calculate acceleration.
- E. When you are going down a slide.
- F. How much force is needed to keep an object sliding.
- G. When a car "loses traction".
- H. Only exists when the object is not moving.
- I. Maximum friction before an object slides.
- J. Exists only when the object is moving.



5. For the mass at the left:
 - A. How much force is necessary to keep this object moving?
 - B. How much force is necessary to start this object sliding?
 - C. If this object starts at rest, will this object slide?
 - D. If an object is accelerating, is it at rest or moving?
 - E. Find the acceleration of the object.

- F. What is the weight of the object?
- G. Find the normal force on the object.

6. What are the units for force?
7. What are the units for mass?
8. A 20 kg object is floating in space.
 - A. What is its mass?
 - B. What is its weight?
9. A 15 kg object is floating in space. What is its mass?
10. A 28 N object is sitting on a desk. What is its weight?

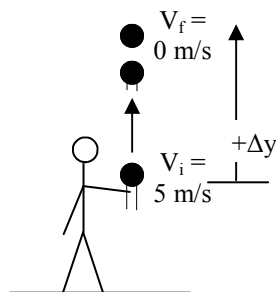


11. Slim Jim is trying to move a 10 kg object. His dog “Bim” is trying to be helpful, but not always succeeding.
 - A. What is the weight of the object?
 - B. What is the normal force on the object?
 - C. What is the net force in the x-direction?
 - D. Calculate the acceleration of the object.



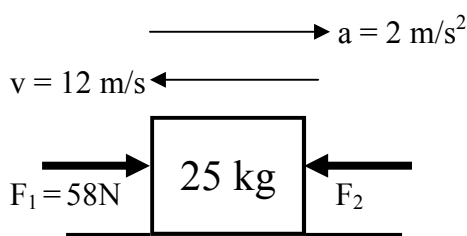
12. A car is moving and there is wind resistance.
 - A. What kind of force is wind pushing against the car?
 - B. Draw and label any other forces acting on the car.
 - C. If $F_{wind} > F_{engine}$, is acceleration + or -?
 - D. If $F_{wind} = F_{engine}$ the car could have its c _____ c _____ on.
 - E. What is the speed of the object if $F_{wind} = F_{engine}$?
 - F. If $F_{wind} = F_{engine}$, then the object is at e _____.

(Look on the “Forces and Newton’s First Law of Motion” notes.)



13. A 2 kg object is thrown into the air going 5 m/s.
 - A. Is the object’s initial velocity + or -?
 - B. Is the object’s acceleration + or -?
 - C. What is the force pulling down on the object (give a number).

Notice that an object can be moving the opposite way of the acceleration.



14. A 25 kg object is moving 12 m/s to the left. It has an acceleration of 2 m/s² to the right.
 - A. Is the object speeding up or slowing down?
 - B. Is the acceleration positive or negative?
 - C. Which force must be bigger?
 - D. Use $F_{net} = ma$ to calculate the net force on the object.
 - E. Since the two force must equal F_{net} , calculate F_2 .